



Measure each pencil tip to tip then place your results in the line plot.

Answers

Ex. $\frac{3}{4}$

1. _____

2. _____

3. _____

4. _____

5. _____

6. _____

7. _____

8. _____

9. _____

10. _____


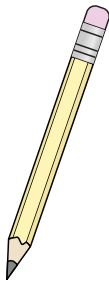
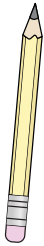


11. _____

12. _____



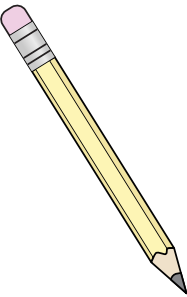
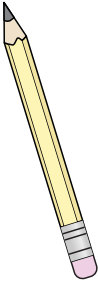
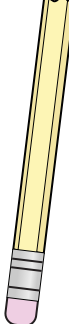
13. _____

14. _____


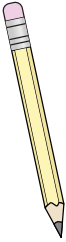

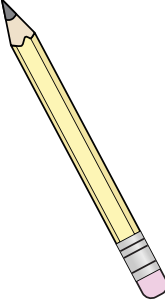

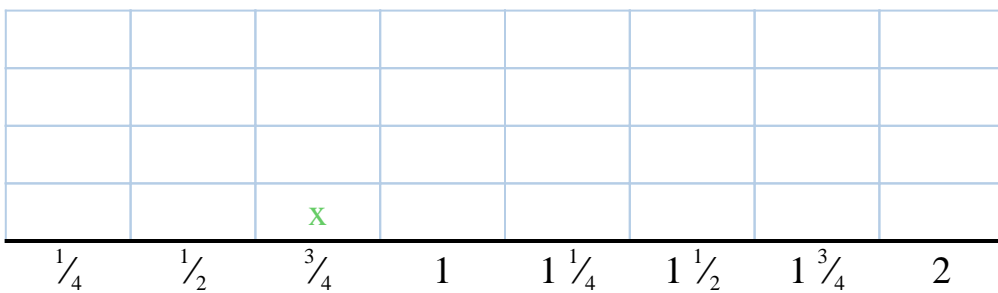
Ex) $\frac{3}{4}$ 1) _____ 2) _____ 3) _____ 4) _____

5) _____ 6) _____ 7) _____ 8) _____ 9) _____








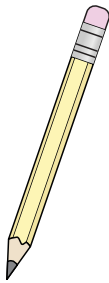
10) _____ 11) _____ 12) _____ 13) _____ 14) _____

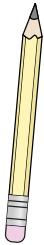











Measure each pencil tip to tip then place your results in the line plot.


Ex)  $\frac{3}{4}$


1)  $1\frac{1}{2}$

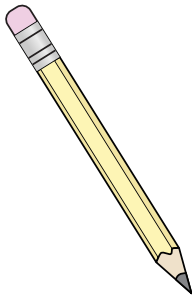
2)  $1\frac{1}{4}$

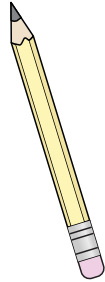
3)  $\frac{3}{4}$

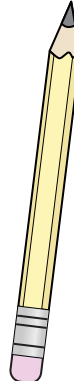
4)  $\frac{1}{4}$


5)  $1\frac{1}{2}$

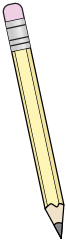
6)  $\frac{1}{2}$


7)  $1\frac{3}{4}$

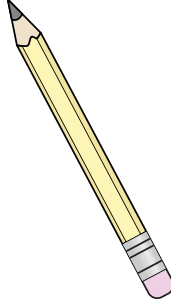
8)  $1\frac{1}{2}$


9)  2

10)  $\frac{1}{4}$

11)  $1\frac{1}{4}$

12)  $\frac{3}{4}$

13)  $1\frac{3}{4}$

14)  $\frac{1}{2}$

Answers

- Ex. $\frac{3}{4}$
1. $1\frac{1}{2}$
2. $1\frac{1}{4}$
3. $\frac{3}{4}$
4. $\frac{1}{4}$
5. $1\frac{1}{2}$
6. $\frac{1}{2}$
7. $1\frac{3}{4}$
8. $1\frac{1}{2}$
9. 2
10. $\frac{1}{4}$
11. $1\frac{1}{4}$
12. $\frac{3}{4}$
13. $1\frac{3}{4}$
14. $\frac{1}{2}$

